

# HOLIDAY HOME WORK ENGLISH

## CLASS VIII

### READING SKILL

1. Read the famous novel 'Pride and Prejudice' and answer the questions:
  - Write the summary of chapters 1 and 2 of the book.
  - What did Mrs. Bennet hope?
  - Why did everyone like Mr. Bingley?
  - How did Mr. Darcy upset Elizabeth?
  - Draw the character sketches of Jane, Elizabeth and Mr. Bingley.
2. Complete the Complete the Comprehension passages given in Grammar book on pages 165 and 167

### WRITING SKILL

3. Imagine you visited an important historical monument. Your friend wants to visit it too. Write a letter to her/him describing the beauty of the monument . Some of the hints for it are :
  - Where is it? Who built and when?
  - What is the style of the building ?
  - What is unique about it?
  - What is the best time to visit it?

### GRAMMAR

4. Write and learn all Homophones, Homographs and Homonyms along with their meaning given on page 176 - 182 in your Grammar book.

### CREATIVE SKILLS

5. Make two beautiful bookmarks . Decorate it and write a famous quotation by a well known poet and author
6. Make a poster on any of these:
  - Donate blood
  - Save water
  - Save girl child
  - Stop violence against womenBe as creative as you can

Note: Write the above home works in A4 size sheets and compile it together. ( Don't use plastic files)

VIII - बालपत्रिका बनाना

विषय -सकारात्मक सोच

निबंध -1. जनसंख्या निवारण

MATHEMATICS      HOMEWORK QUESTIONS  
CLASS VIII

1. What number am I ? I am a three digit number . My ten`s digit is 5 more than my ones digit .My hundred`s digit is 8 less than my ten`s digit .

2. Replace the question mark ,

$$O + O + O = 27$$

$$\Delta + \Delta + \Delta + O = 24$$

$$O + \Delta + @ + @ = 96$$

$$@ + O + \Delta = ?$$

3. Decide which of the following does not belong in the following group. Explain your reasoning below

27	423
54	61

(i)\_\_\_\_\_ does not belong .because \_\_\_\_\_

(ii) Now give different possible answer using different reasons.

4. If the day after tomorrow is Saturday , what day was two days before yesterday ?

5. Can you make 36 with 6, 2,9, 5, 2, and 3.

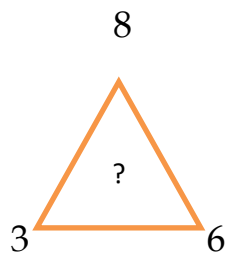
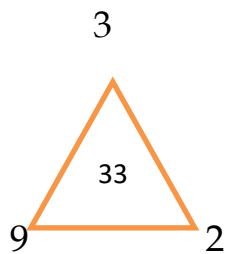
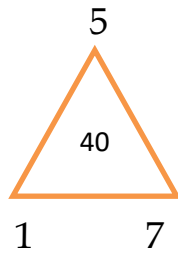
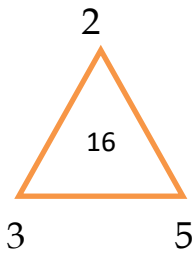
One example is given  $39 - 5 + 2 = 36$ .

6. Find the missing number in the series ,

a) 1 , ? , 27 , 64 , 125 .

b) 6, 11, 21, 36, 56, ? .

7. Which number should replace the question mark ,



8. If '+' means  $\div$ ,  $\div$  means  $\times$ ,  $\times$  means  $-$ , and  $-$  means  $+$ , then find  $24 + 6 \times 2 \div 3 - 4 = ?$

9. A class of girls stands in a single line . One girl is 19<sup>th</sup> in order from both the ends . How many girls are there in the class ?

10. Write the table of 12 to 20

-----

## SCIENCE HOLIDAY HOMEWORK (2018-19)

### CLASS VIII:

1. Collect 5 samples of metals and non-metals. Differentiate the physical properties of metals and non-metals.
2. Collect 3 samples of synthetic fabrics. Name them and write their uses.
3. Learn and read the chapters thoroughly.( Ch-1,2 and 3.)

## **HOLIDAY ASSIGNMENT-2018-19**

### **SOCIAL SCIENCE- CLASS VIII**

Q1. 'Presence of mind and not losing your cool during disasters are very important attributes'. So, make a project on '**Manmade Disaster**' with the mitigation.

Q2. Through pictures depict the various '**Fundamental Rights**' guarantees to the Indian citizen and explain each right's.

**\*NOTE:-**Question 1 in your geography copy and Question 2 in your civics copy.